

Identifying Functions – Day 3

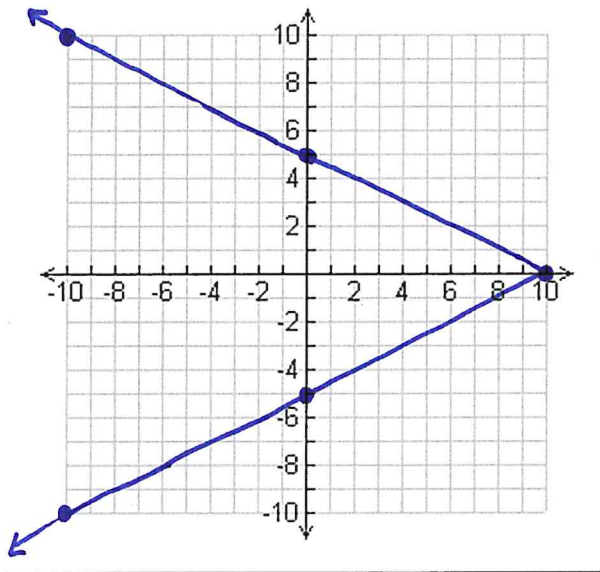
Unit 3: Introduction to Functions

For each of the following functions:

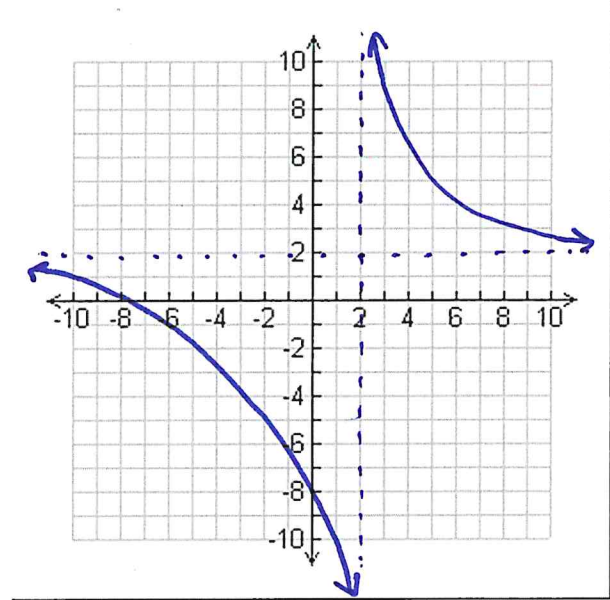
A. Explain why it is, or why it is not a function based on the information provided.

B. If it is a function, then provide the Domain and Range for that function.

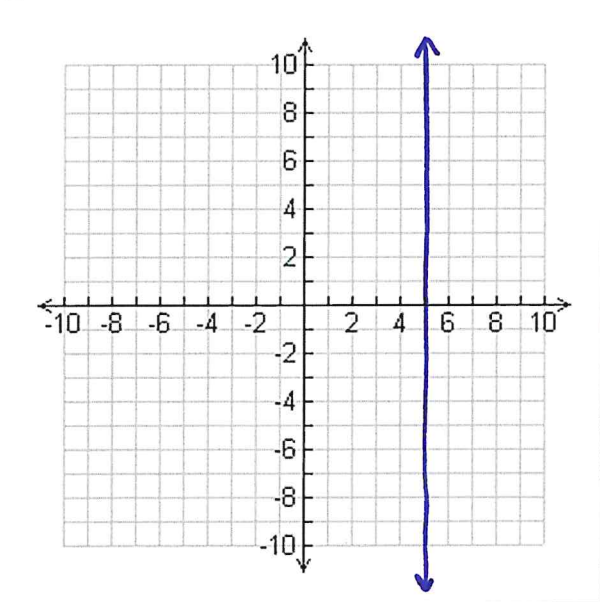
1.



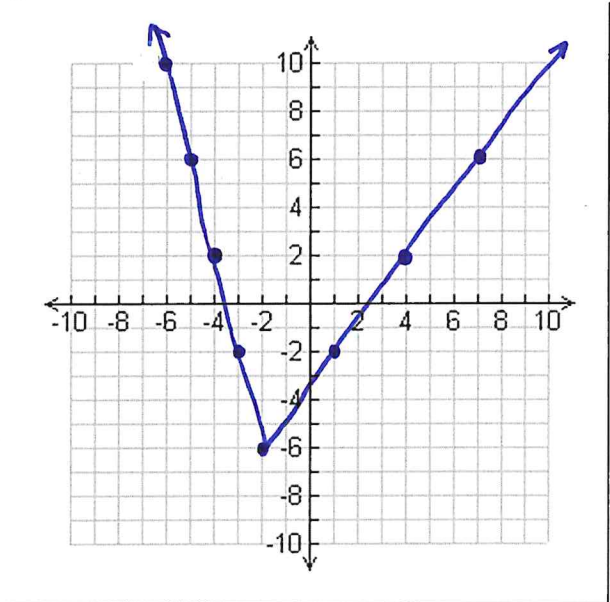
2.



3.



4.

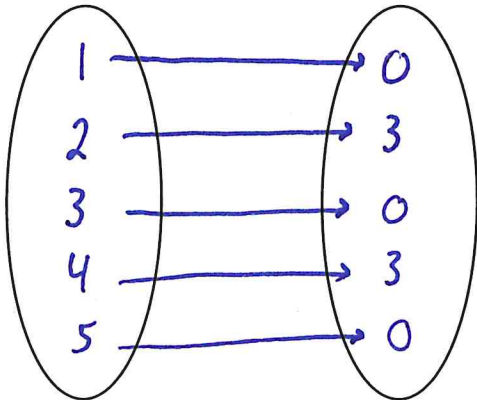


For each of the following functions:

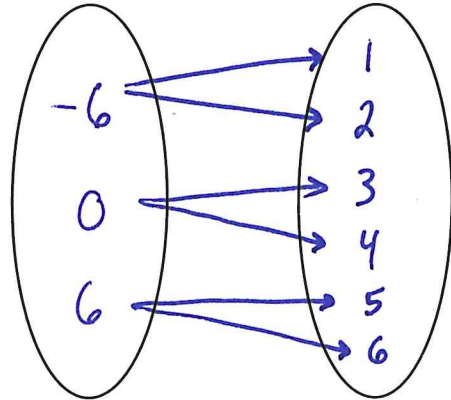
A. Explain why it is, or why it is not a function based on the information provided.

B. If it is a function, then provide the Domain and Range for that function.

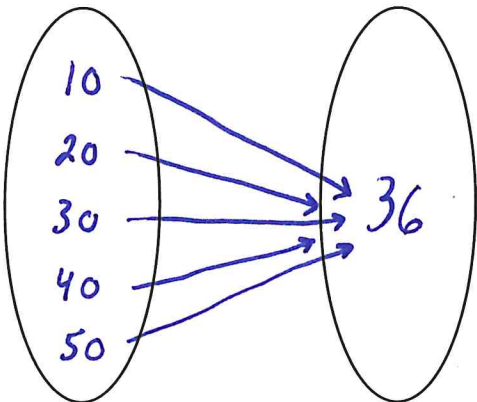
5.



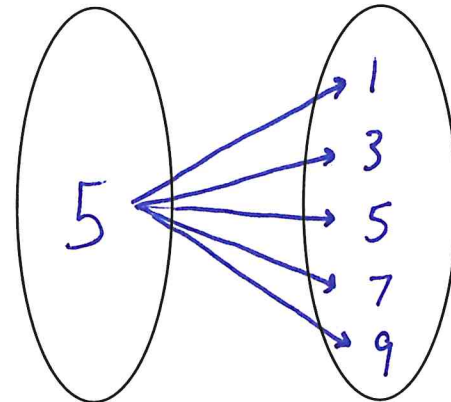
6.



7.



8.



9. $(-3, -15), (-2, -12), (-1, -9), (0, -6), (1, -3), (2, 0)$

10. $(-4, 2), (-3, 2), (-2, 2), (-1, 2), (0, 2), (-1, 4)$

11. $(-5, 8), (-5, 10), (-5, 12), (-5, 14), (-5, 16), (-5, 18)$

12. $(-3, -28), (-2, -14), (-1, -4), (0, 2), (1, 4), (2, 2)$